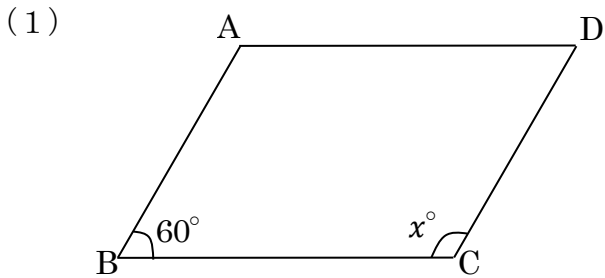
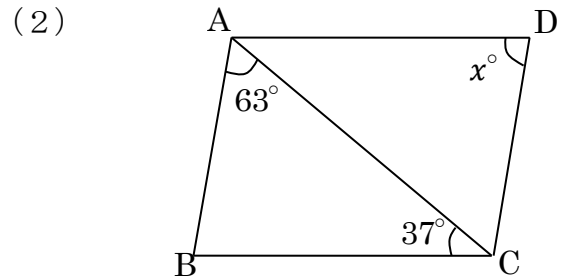


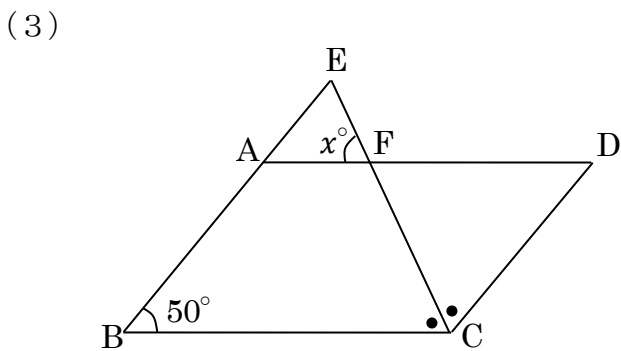
問 次の図で四角形 ABCD が平行四辺形するとき、 $\angle x$ の大きさを求めなさい。



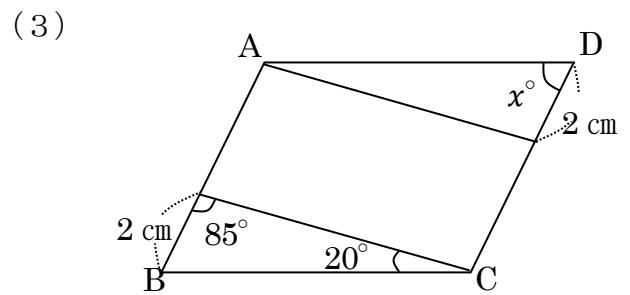
$\angle x =$ °



$\angle x =$ °



$\angle x =$ °



$\angle x =$ °



【解答】

問

(1) 120°

(2) 80°

(3) 65°

(4) 75°

