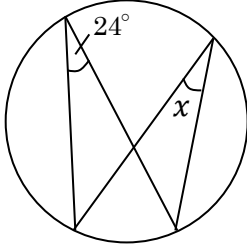


中3 数学	円周角の定理	氏名
円周角と中心角		

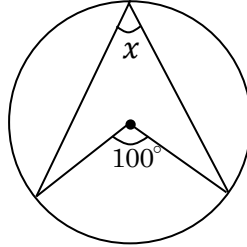
問 次の $\angle x$ の大きさを求めなさい。

(1)



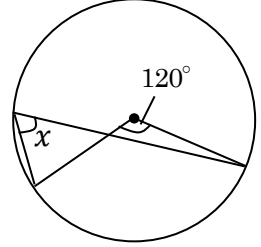
$\angle x = \dots\dots\dots^\circ$

(2)



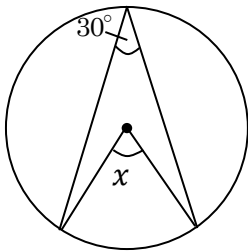
$\angle x = \dots\dots\dots^\circ$

(3)



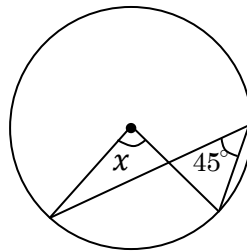
$\angle x = \dots\dots\dots^\circ$

(4)



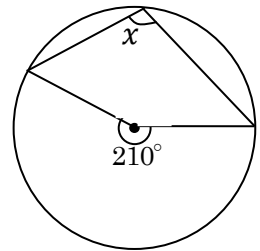
$\angle x = \dots\dots\dots^\circ$

(5)



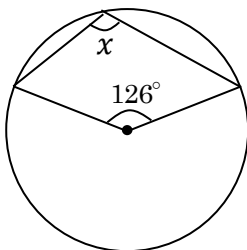
$\angle x = \dots\dots\dots^\circ$

(6)



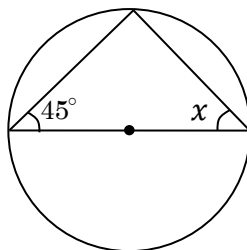
$\angle x = \dots\dots\dots^\circ$

(7)



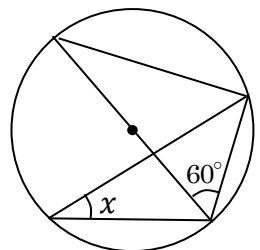
$\angle x = \dots\dots\dots^\circ$

(8)



$\angle x = \dots\dots\dots^\circ$

(9)



$\angle x = \dots\dots\dots^\circ$