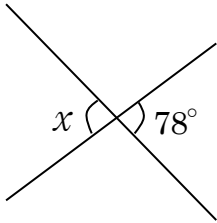


中2数学	図形	氏名
平行線と角(練習問題)		

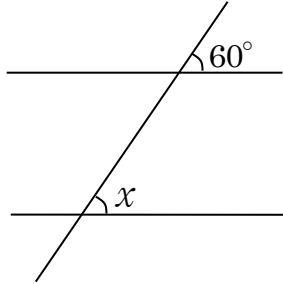
問 次の $\angle x$ の大きさをそれぞれ求めよ。

(1)



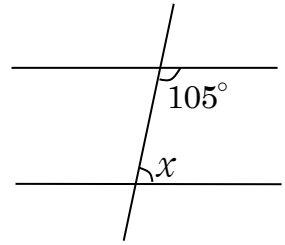
.....°

(2)



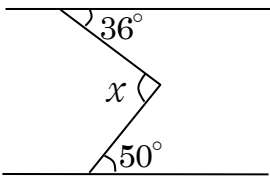
.....°

(3)



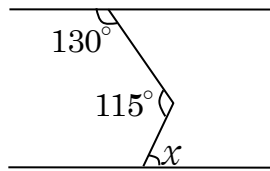
.....°

(4)



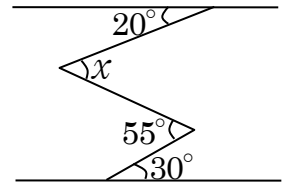
.....°

(5)



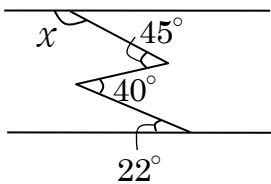
.....°

(6)



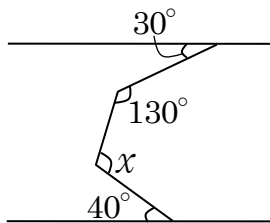
.....°

(7)



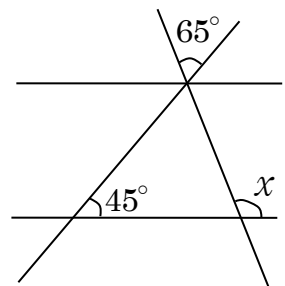
.....°

(8)



.....°

(9)



.....°



【解答】

- 問 (1) 78° (2) 60° (3) 75° (4) 86°
(5) 65° (6) 45° (7) 153° (8) 120° (9) 110°

