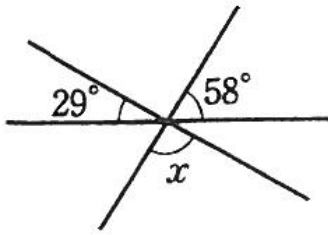


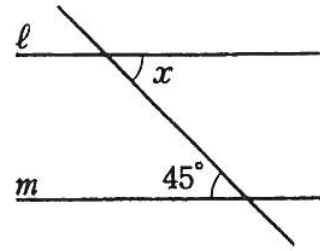
2 次の x の示す角度を求めよ。

(1)



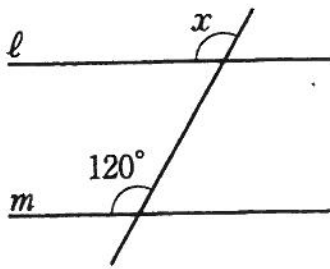
$x = \dots\dots\dots^\circ$

(2)



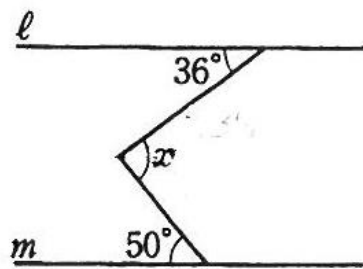
$x = \dots\dots\dots^\circ$

(3)



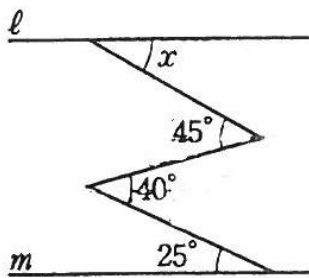
$x = \dots\dots\dots^\circ$

(4)



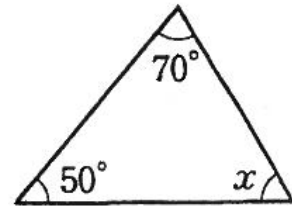
$x = \dots\dots\dots^\circ$

(5)



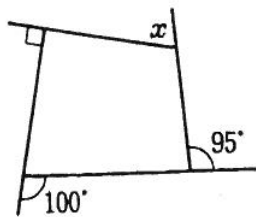
$x = \dots\dots\dots^\circ$

(6)



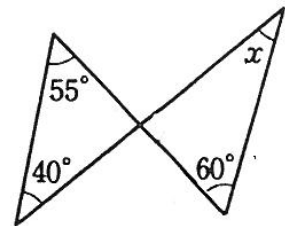
$x = \dots\dots\dots^\circ$

(7)



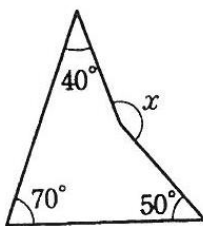
$x = \dots\dots\dots^\circ$

(8)



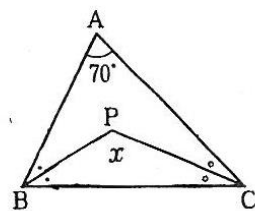
$x = \dots\dots\dots^\circ$

(9)



$x = \dots\dots\dots^\circ$

(10)



$x = \dots\dots\dots^\circ$



ドリル一む

